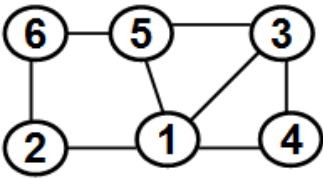


**CSC 641 Network Science**  
**Spring 2017**  
**Instructor: Dr. Natarajan Meghanathan**  
**Exam 3 (Take Home)**

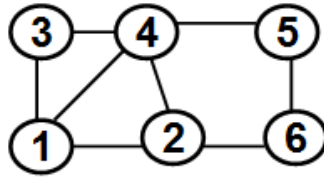
**Due: April 18, 2017** (4 PM, in class). Submit a printed hardcopy in class (with this quiz sheet as a cover page and your name and J# on the top of the sheet).

-----

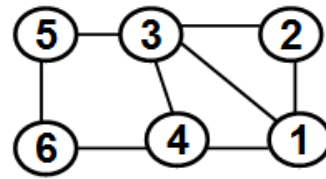
1) (35 pts) Run the BFS algorithm to determine the **betweenness of the edges** in the graphs assigned to you. Show in detail all the work [Note: You should NOT use the software to compute the edge betweenness]



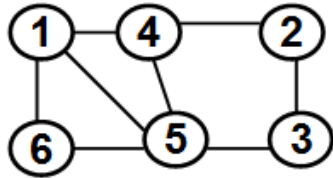
Ashley Abraham



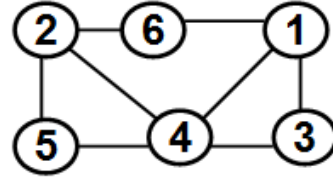
Jonathan Adams



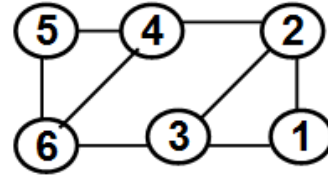
Uzochukwu Akabueze



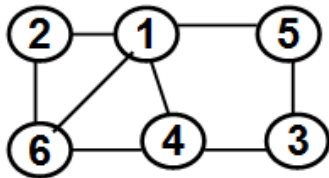
Mahzabin Akhter



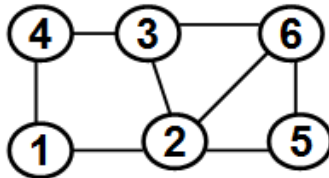
Omar Aljawfi



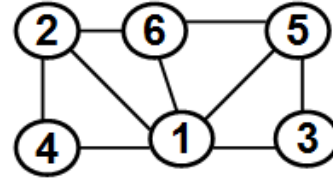
Bejnamin Garlington



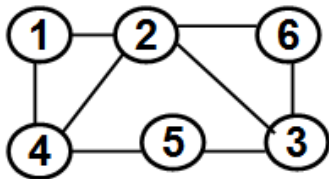
Md Mohiuddin Hasan



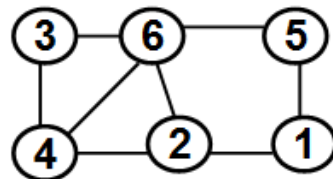
Anthony Lam



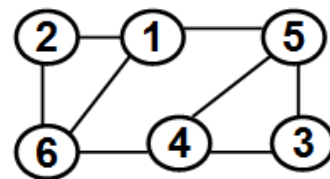
Peter Lowe



Md A. Rahman



Maruful A. Sumon

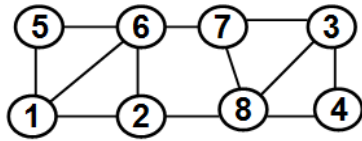


Ying Zhang

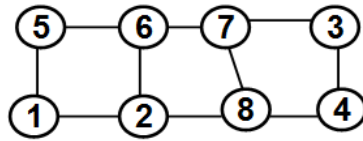
2) (35 pts) Run the Girvan Newman community detection algorithm based on (a) Edge betweenness and (b) Neighborhood Overlap: NOVER scores to determine a partitioning of the graph into communities.

For each of (a) and (b):

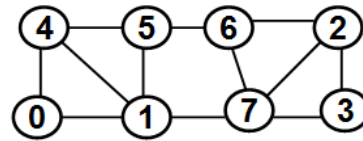
Determine the modularity score for each of the communities and the total modularity score. Also, draw the partitioning hierarchy and indicate the modularity score of the partitions/communities.



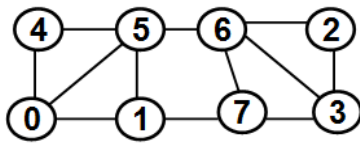
Ashley Abraham



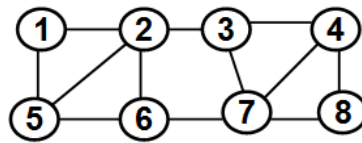
Jonathan Adams



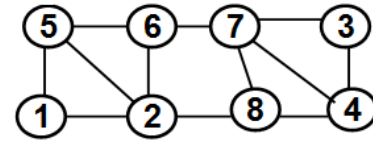
Uzochukwu Akabueze



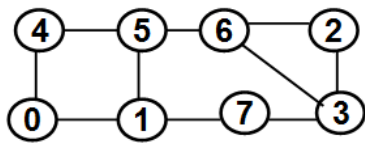
Mahzabin Akhter



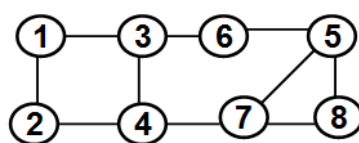
Omar Aljawfi



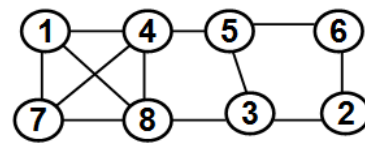
Bejnamin Garlington



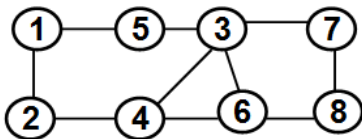
Md Mohiuddin Hasan



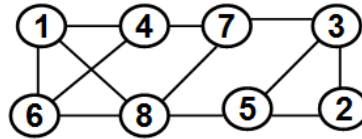
Anthony Lam



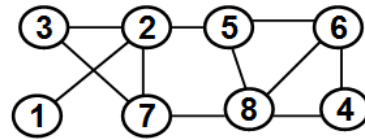
Peter Lowe



Md A. Rahman

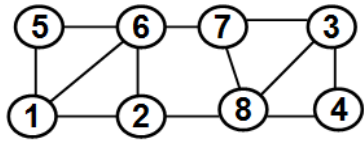


Maruful A. Sumon

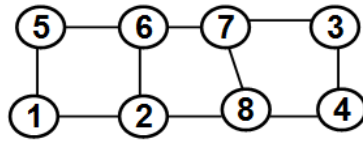


Ying Zhang

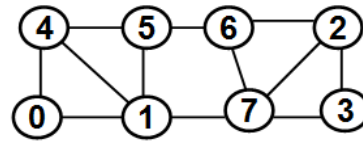
- 3) (30 pts) (a) Determine the threshold NOVER score (minimum NOVER score) that would guarantee the satisfaction of the **strong triadic closure** property for the edges in the following graph.
- (b) Using the threshold NOVER score determined, identify the strong and weak ties.
- (c) Determine a partitioning of the graph into communities based on the strong/weak ties identified.
- (d) Determine the modularity score for each of the communities and the total modularity score. Also, draw the partitioning hierarchy and indicate the modularity score of the partitions/communities.



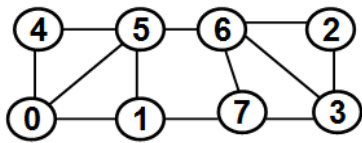
Ashley Abraham



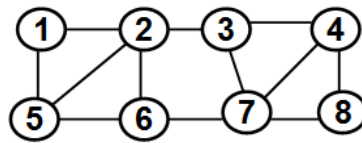
Jonathan Adams



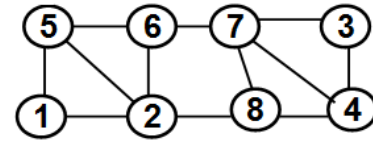
Uzochukwu Akabueze



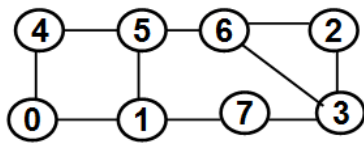
Mahzabin Akhter



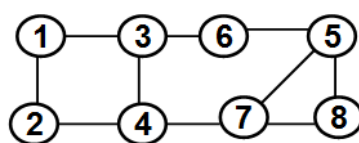
Omar Aljawfi



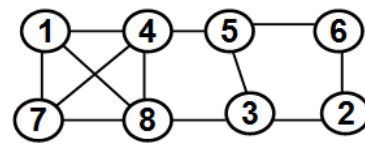
Bejnamin Garlington



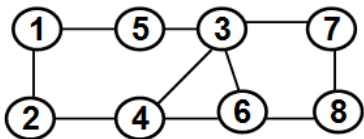
Md Mohiuddin Hasan



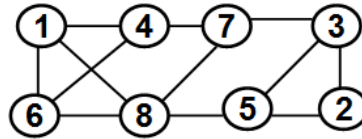
Anthony Lam



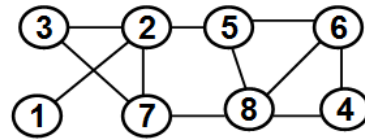
Peter Lowe



Md A. Rahman



Maruful A. Sumon



Ying Zhang